



Egyptian Pioneer Schools

Preparatory 1 Science – Booklet First Term

Academic year: 2018/ 2019

Mr. Haitham said



تابع جديد ذاكرولاي على موقعنا
<https://www.zakrooly.com>

SCIENCE DEPARTMENT



هذا العمل حصري على موقع ذاكرولاي التعليمي ويسمح بمشاركته فقط ولا يسمح بتداوله على أي مواقع أخرى
للمزيد من أعمالنا الحصرية، تفضل بزيارة موقعنا الإلكتروني من هنا <https://www.zakrooly.com>

E . P . S

Mr. Haitham said

Contents

Unit	Lesson Topic
Matter	1- Matter and its Characteristics.
	2- Matter Construction.
	3- Atomic Structure of Matter.
Energy	1- Energy Resources and forms.
	2- Energy Transformation.
	3- Heat Energy.
Diversity	1- Living Organisms Diversity and Principles Of Their Classification
	2- adaptation and Diversity Of Living Organisms.

E . P . S

Mr. Haitham said

Unit One

Matter Construction



3|Page

m



هذا العمل حصري على موقع ذاكروولي التعليمي ويسمح بمشاركته فقط ولا يسمح بتداوله على أي مواقع أخرى
للمزيد من أعمالنا الحصرية تفضل بزيارة موقعنا الإلكتروني من هنا <https://www.zakrooly.com>

E . P . S

Mr. Haitham said

Lesson one

Matter and its characteristics

Matter: anything has mass and volume.

- **Characteristics to differentiate between matter:**

Physical properties of matter:

1. color, taste and smell
2. density
3. Melting point
4. boiling point
5. Hardness
6. Electrical conductivity
7. Thermal conductivity

1. Color:

- Iron - Silver - Gold.
- We can differentiate them by colors.



Taste:

- Flour - sugar - table salt
- We can differentiate them by tastes



Smell:

- Oil - vinegar - perfume
- We can differentiate them by smells.



Important Note:



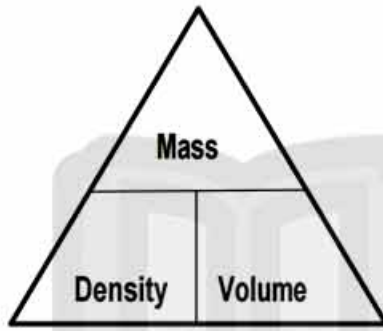
- Color, taste and smell can differentiate between some materials because they are**
- Tasteless, colorless and odorless
 - Some materials are dangerous

E . P . S

Mr. Haitham said

2. Density.

- Density:
 - The mass of unit volume
 - The mass of 1 cm^3
- Measuring unit is g/cm^3



$$\text{Density} = \text{Mass} \div \text{Volume}$$

$$\text{Volume} = \text{Mass} \div \text{Density}$$

$$\text{Mass} = \text{Density} \times \text{Volume}$$

Problem Models:

1. A piece of Iron has a volume of 10 cm^3 and a mass of 78 g . Find its density
 - Density = Mass \div Volume
 - Density = $78 \div 10 = 7.8 \text{ g/cm}^3$
2. A piece of wood has a density of 0.4 g/cm^3 and a volume of 20 cm^3 . Find its mass
 - Mass = Density \times Volume
 - Mass = $0.4 \times 20 = 8 \text{ g}$

What is meant by?

1. The wood has a density of " 0.4 g/cm^3 "?
The mass of 1 cm^3 of wood is 0.4 g
2. The mercury has a density of " 13 g/cm^3 "?
The mass of 1 cm^3 of mercury is 13 g

E . P . S

Mr. Haitham said

Science Activity

To compare between the density of some substances and water

**Steps:**

Fill a bowl with water and put the following substances

1. A piece of wood
2. An iron nail
3. An ice cube
4. A piece of cork
5. A piece of wax
6. Drops of oil

Observation:

What happens to the following substances?

Put ✓ in front of the correct one

	Mass	Volume	Density	You know Water density = 1 g/cm^3	
				Float	sink
Wax	18 g ÷	10 cm^3			
Nail	78 g ÷	10 cm^3			
Ice cube	9 g ÷	10 cm^3			
Cork	5 g ÷	10 cm^3			
Wood	4 g ÷	10 cm^3			
Oil	8 g ÷	10 cm^3			

Conclusion:

- Substances that have a density **less** than the density of water **float**
- Substances that have a density **more** than the density of water **sink**

E . P . S

Mr. Haitham said

Give Reason:

1. Equal volumes of different materials have different masses.
1. Equal masses of different materials have different volumes.
 1. Because they have different densities
2. The cork & wood float on the water surface
 2. Because the density of wood & cork is less than the density of water.
3. The glass & Iron sinks in the water
 3. Because the density of glass and Iron is more than the density of water.

Applications on the density:**1. Determination the purity of matter**

The change in the density refers to the change in matter quality

- For example.

Determination of the quality of powdered milk, when compared with density the natural milk.

2. Water cannot put out petrol fires. (Give Reason)

Because the density of the oil is less than the density of the water so, it floats over the water and cannot put out fire.

3. Hydrogen or Helium balloons rise up in air. (Give Reason)

Because the density of helium and hydrogen is less than the density of the air so, it rises up in the air.



E . P . S

Mr. Haitham said

3,4. Melting point and boiling points.

Melting point:

substance changes from solid to liquid

- Different solids have different melting points:
 1. Some solid substances have low melting points such as
 - Wax, Butter and Ice.



2. Some solid substances have high melting points such as
 - Iron, gold and Aluminum

Life Applications:

1. In making of alloys.
 - a. Copper - gold Alloy: used in making jewels.
 - b. Nickel - chrome Alloy: used in making heating coils.
2. In the manufacture of cooking pans from aluminum.
Because, Aluminum has high melting point.

Boiling point:

The temperature at which The substance changes from the liquid state to the gaseous state

Life application on boiling process :

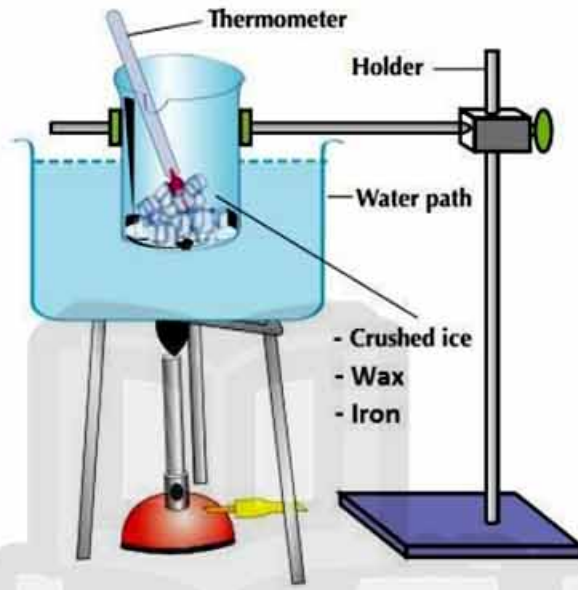
Separation of the components of petroleum oil .

E . P . S

Mr. Haitham said

Science Activity

To study matter and the melting point (fusion point)

Steps:

1. Put a beaker containing (ice - wax - iron) in a water bath
2. Put the water bath on a flame for a period of time
3. Use the thermometer to stop heating at 100

Observation:

What happens when you heat the following substances to 100°C?

Put ✓ in front of the correct one

	Ice		Wax		Iron	
	Melts	Doesn't melt	Melts	Doesn't melt	Melts	Doesn't melt
At 5 °c						
At 40 °c						
At 100 °c						

Conclusion

- Each substances have a different melting point.
- Some substances have a low melting point [butter, ice, wax]

E . P . S

Mr. Haitham said

5. Hardness.

- Some solid substances are soft at the room temperature
 - (Rubber - Plastic - Clothes)
- Some solid substances need heat to be soften
 - (Iron - Copper - Aluminum)
- Some solid substances do not melt by heating
 - (Coal - Sulphur - Wood)

Life Applications on Hardness:

1. **Iron is better than Copper in concrete buildings. (Give Reason)**
Because, iron is harder than copper.



2. **Screwdrivers are made of steel iron. (Give Reason)**
Because it is very hard.



E . P . S

Mr. Haitham said

6. Thermal conductivity

Heat Conductors

Heat Insulators



Substances that allow heat to flow

- Iron
- Copper
- Aluminum

Substances that do not allow heat to flow

- Wood
- Plastic
- Air



تابعنا على صفحتنا على الفيسبوك

www.facebook.com/ZakrolySite

E . P . S

Mr. Haitham said

7. Electric conductivity

Electric Conductors

Substances that allow electricity to flow

- Metals as
(Iron, Copper and Aluminum)

Electric Conductor

- Salt solution
- Acidic solution (lemon)
- Alkaline solutions (shampoo)
- Water

Electric Insulators

Substances that don't allow electricity to flow

- Non-Metals as
(Wood, Sulphur and Plastic)

Electric Insulator

- Sugary solutions
- Air
- Benzene
- Oil



Life Applications on Electric & Thermal Conduction:

1. **Electric wires (cables) are made of copper or Aluminum.**
Bec. They are electric conductors.
2. **Electric wires (cables) are covered with Plastic**
Bec. Plastic is electric insulator.
3. **Cooking pans are made of Aluminum.**
Bec. They are heat conductors.
4. **Handles of cooking pans are made of plastic or wood.**
Bec. They are heat insulator.



E . P . S

Mr. Haitham said

#. Metals & chemical activity.

Very active metals	Less active metals	Inactive metals
They lose their luster once they exposed to air	They rust after long time exposed to air	They don't react with air
Sodium - potassium	Iron - aluminum - copper	Silver - gold
		

Life Application on chemical Activity:

- Sodium loses its luster if exposed to the atmospheric air. (Give Reason)**
Bec. It is very active metals.



- Steel bridges are coated with inactive material. (Give Reason)**
To protect the iron from rust.
- Iron rust while exposing to the air. (Give Reason)**
Bec, it is a less active metal.

E . P . S

Mr. Haitham said

Lesson Review

Q1: Complete the following:

1. Matter is anything that has ----- and -----
2. We distinguish between gold and silver by their different -----
3. We differentiate between table salt and sugar by their different -----

4. We differentiate between perfume and vinegar by their different -----
5. Density is the mass of -----
6. Golden jewels are made of ----- Alloy, while the heating coils are made up of ----- Alloy.
7. The measuring unit of density is -----
8. Equal volumes of different substances have different -----
because they have different densities.
9. Melting point is ----- at which substances change from solid state to ----- state.
10. There are materials don't soften by heating such as -----
11. Electric insulators are made up of materials such as -----
--- and -----
12. Jewels are made of ----- alloy, while heating coils are made of -----.
13. There are good conductors of electricity and heat such as -----
--- and ----- while there are bad conductors of electricity and heat such as ----- and -----
14. Active metals lose their ----- when they are exposed to moist air.
15. Gases are ----- conductors of electricity.
16. Acidic solution is ----- conductor of electricity.

E . P . S

Mr. Haitham said

Q2: Choose the correct answer:

- The color property is a distinguishing factor between -----
 - table salt and flour
 - iron and gold
 - oxygen and nitrogen
 - oxygen and carbon dioxide
- The measuring unit of density is -----
 - gm/m^3
 - gm/cm
 - gm/cm^3
 - gm/cm^2
- Handles of Cooking pans are made of -----
 - Iron
 - plastic
 - aluminum
 - stainlesssteel
- Equal masses of different substances have different -----
 - volumes only
 - densities only
 - lengths only
 - volumes and densities
- The handles of cooking pans are made of -----
 - Iron
 - plastic
 - wood
 - wood and plastic
- All the following solutions conduct electricity except -----
 - Salt solution
 - Alkaline solution
 - acidic solution
 - sugary solution
- All the following substances are heat conductors except -----
 - Wood
 - aluminum
 - copper
 - iron
- The property of electrical conductivity is a distinguishing factor -----
 - wood and plastic
 - no correct answer
 - iron and wood
 - iron and copper
- One of the elements which don't react with oxygen of air is -----
 - Potassium
 - Sodium
 - Aluminum
 - Gold

E . P . S

Mr. Haitham said

Q3: Give Reason for the following:

1. Wood floats over the water surface while iron sinks.

.....

.....

2. Equal masses of different substances have different volumes.

.....

.....

3. Balloons filled with Helium and Hydrogen rise up in the air.

.....

.....

4. Water cannot put out Petrol fire.

.....

.....

5. We use Aluminum in making cooking pans.

.....

.....

6. Steel bridges are painted with inactive material.

.....

.....

7. It is preferable to use iron with concrete in building than copper

.....

.....

8. Sodium loses its luster once it exposes to the atmospheric air.

.....

.....

E . P . S

Mr. Haitham said

Q4: Problems:

1. A piece of iron has a mass of 30 kg and a volume of 0.3 m³. Find its density

2. An amount of milk has a mass of 300 g and a density of 0.6 g/cm³. Find its volume

Q5: What is meant by?

1. The density of water is 1 g/cm³.

2. The density of mercury is 13 g/cm³.

3. The melting point of iron is 1538 °C

4. The boiling point of water is 100 °C

E . P . S

Mr. Haitham said

Lesson Two:

Matter Construction

Molecules:

It is the smallest building unit of the matter that can exist freely

▪ Properties of the molecules of matter:

1. Molecules keep the properties of matter
2. Molecules are in a state of continuous motion in all directions
3. There are spaces between the molecules of matter
4. There are forces between the molecules of matter

⊗ Intermolecular spaces:

The spaces between the molecules of the matter.

⊗ Intermolecular force:

The force connects the molecules of the matter together.

Molecules	Solid state	Liquid state	Gaseous state
Motion	Vibrate Limited	Slide past each other Free	Fast, randomly Completely Free
Intermolecular spaces:	Very narrow	Far	Very far
Intermolecular forces:	Strong	Weak	Very weak
Volume:	Definite	Definite	Indefinite
Shape:	Definite	Indefinite	Indefinite

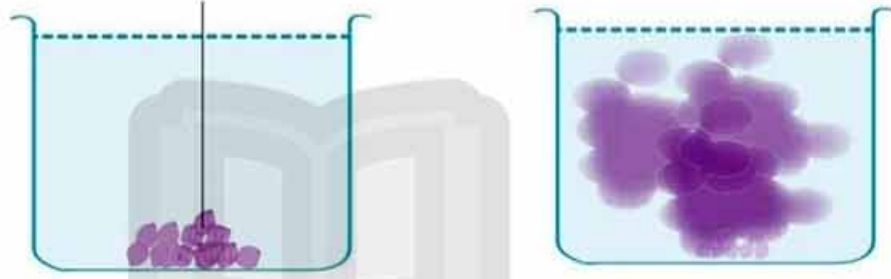
E . P . S

Mr. Haitham said

Science Activity

1. The matter consists of tiny molecules which are in a continuous motion:

Permanganate

Observation:

- What happens when you add some permanganate [violet] to a beaker contains an amount of water?

Put \checkmark in front of the correct one

The violet colour stays in place

The violet colour doesn't spreads all over the water

The violet colour spreads all over the water

Conclusion:

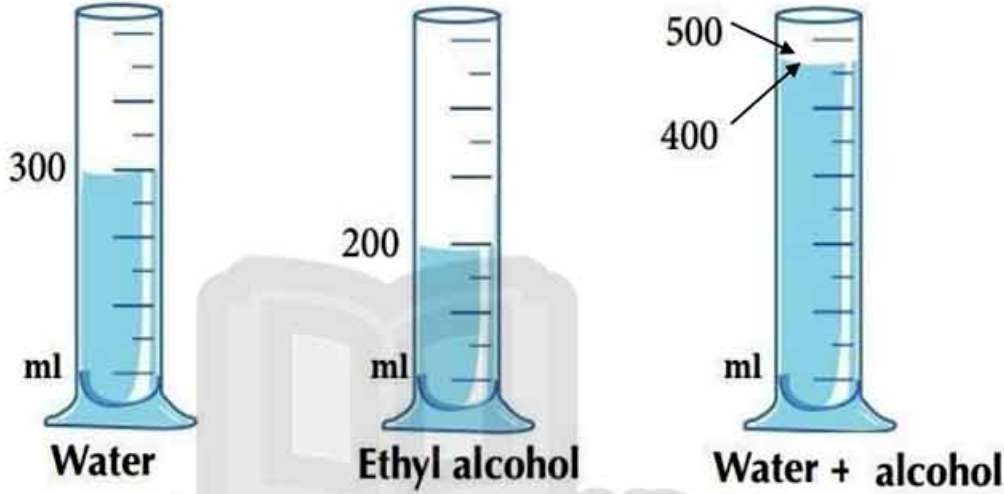
- The matter consists of tiny parts called Molecules
- Molecules of matter are in a state of continuous motion.

E . P . S

Mr. Haitham said

Science Activity

2. The presence of intermolecular spaces between the molecules of matter.

Observation:

What happens when you add 300 ml of water to 200 ml of alcohol then observe the total volume?

Put in front of the correct one

- The total volume = 500 ml
- The total volume is less than 500 ml
- The total volume is more than 500 ml

Conclusion

- There are intermolecular spaces between the molecules of matter.
- **Explanation**, As the molecules of the alcohol fill the intermolecular spaces of the water

E . P . S

Mr. Haitham said

Give Reason:

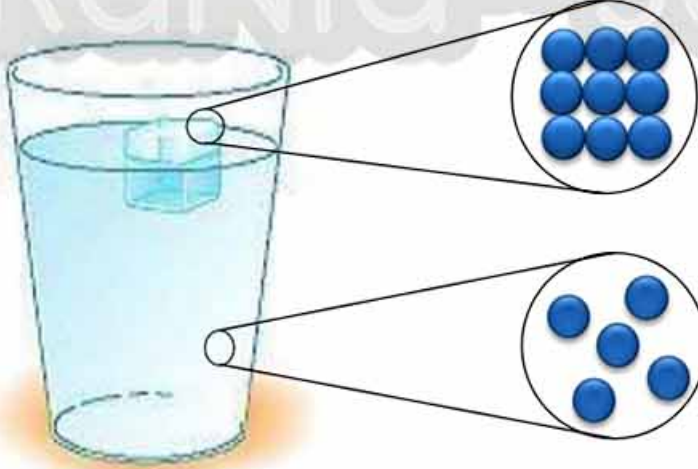
- 1. When you put a drop of ink in the water, it spreads.**
Because the ink molecules have a continuous motion in all direction
- 2. Solids have definite shape and volume.**
- 3. It is hard to break iron rod.**
Because Iron has very strong intermolecular forces.
- 4. Liquids have indefinite shape and definite volumes.**
- 5. It is easy to make an amount water into portions.**
Because they have weak intermolecular forces.
- 6. Gases have indefinite volume and shape.**
Because gases have very weak intermolecular forces

Changes of matter:**1. Melting:**

The change of matter from solid state to liquid state by heating.

- **Matter changes from solid state to liquid state by heating. (G.R)**

Because the energy of molecules increase so they move faster, and the spaces increase then changes into liquid

**Ice Molecules**

- Vibrate Inplace
- Regular pattern

Water Molecules

- Slide past each other
- Random shape

E . P . S

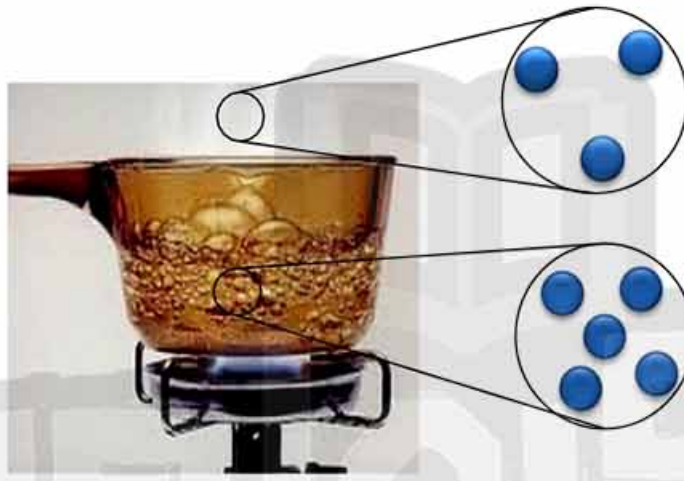
Mr. Haitham said

Changes of matter:2. Vaporization:

The change of matter from liquid state to gas state by heating.

- Matter changes from liquid state to gas state by heating. (G.R)

Because the energy of molecules increase so they speed increase, and the spaces increase then changes into gas

**Vapor Molecules**

- Completely free
- Random shape

Water Molecules

- Slide past each other
- Random shape

Important Note:

- The molecules composed of tiny particles called Atoms.
- **Atom:** The basic building unit of molecule, which cannot exist freely.

Example:

Water Molecule



Oxygen Molecule



Oxygen Atom





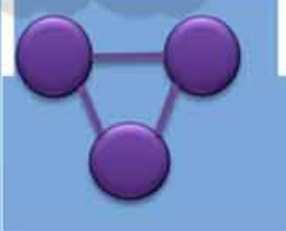
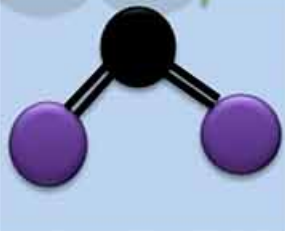


Hydrogen Atom

E . P . S

Mr. Haitham said

Types of Molecules:

Types of Molecules	
Molecules of an elements	Molecules of a compound
<p>Element:</p> <ul style="list-style-type: none"> The simplest form of matter that don't break down into simpler substance. <p>It is a substance composed of similar kind of atoms.</p>	<p>Compound:</p> <ul style="list-style-type: none"> The chemical combination of two or more elements with fixed ratio. <p>It is a substance composed of different kinds of atoms.</p>
Example	Example
<p>(Na) sodium</p> 	<p>(NaCl) table Salt</p> 
<p>(H₂) Hydrogen</p> 	<p>(H₂O) Water</p> 
<p>(O₃) Ozone</p> 	<p>(CO₂) Carbon dioxide</p> 

E . P . S

Mr. Haitham said

Important Note:

- Elements may be solid, liquid or gas
- Elements may be
 - **Monoatomic:** composed of one atom (Iron)
 - **Diatomic:** composed of two atoms (Oxygen)
 - **Triatomic:** composed of three atoms (Ozone)

Types of elements:

Types of Elements	Solids	Mono-atomic	<ul style="list-style-type: none"> - Carbon (C) - Silver (Ag) - Sodium (Na) - Iron (Fe) - Calcium (Ca)
		Di-atomic	Only Mercury (Hg)
	Liquids	Mono-atomic	Only Mercury (Hg)
		Di-atomic	Only Bromine (Br ₂)
	Gases	Mono-atomic	<u>Inactive gases</u> <ul style="list-style-type: none"> - Helium (He) - Neon (Ne)
		Di-atomic	<u>Active gases</u> <ul style="list-style-type: none"> - Oxygen (O₂) - Hydrogen (H₂)

E . P . S

Mr. Haitham said

Important Note:

- Compounds may be solid, liquid or gas
- Compound are made up of different elements and atoms

How many elements and atoms? **Na₂SO₄**

Capital Letters = Elements	Lower Numbers = Atoms
— Count the capital letters	— Count the lower numbers
N → O → 3 Elements S →	Na = 2 → S = 1 → 7 Atoms O = 4 →

Chemical formula:

A set of chemical symbols represent the number and the kind of elements.

Name of the molecule	Chemical formula	Number of atoms	Number of elements
1. Water	H ₂ O	3	2
2. Sodium chloride	NaCl	2	2
3. Ammonia	NH ₃	4	2

E . P . S

Mr. Haitham said

Lesson Review

Q1: Complete the following:

1. The ----- is the basic building unit of matter
2. The molecules have intermolecular ----- and -----
3. The solids have ----- shape and ----- volume.
4. The gases have ----- shape and ----- volume.
5. The liquids have ----- shape and ----- volume.
6. The ----- is the simplest form of matter that cannot be analyzed (broken down)
7. Melting process is the change of matter from ----- to -----
8. Evaporation process is the change from ----- to -----
9. When the any substance is heated the intermolecular spaces ----- and the intermolecular forces -----
10. The molecules composed of tiny particles which are called -----
11. The molecules of element composed of ----- atoms.
12. The molecules of a compound composed of ----- atoms.
13. Some solid element composed of one atom such as ----- and other liquids composed of one atom such as ----- while other have two atoms such as -----
14. Gaseous elements composed of one atom such as....., while other gaseous elements have two atoms such as.....
15. The chemical formula is a set of ----- shows the numbers and the kind of elements.

E . P . S

Mr. Haitham said

Q2: Give Reason:

1. When you put a drop of ink in the water it spreads in the whole water

2. It is hard to break iron rod

3. It is easy to make an amount water into portions

4. Solids have definite shape and volume.

5. Liquids take the shape of the container.

6. Gases take the shape and the volume of the container.

7. Solids changes to liquid by heating.

Q3: How many atoms and elements are in the following molecules?

1. NH₃ (Ammonia gas)

• ----- atoms, ----- element

2. H₂SO₄ (Sulphuric Acid)

• ----- atoms, ----- element

E . P . S

Mr. Haitham said

Q4: What happens when?

1. You put a drop of ink in the water.

2. You heat a piece of iron strongly.

3. You add 300 ml of water to 200 ml of alcohol and observe the total volume.

Q5: Compare the elements molecule and the compound molecule:

	Element molecule	Compound molecule
Definition		
Atoms		
Example		

E . P . S

Mr. Haitham said

Lesson Three:

Atomic structure of matter

Atom

The basic building unit of matter that cannot exist freely

• Properties of an Atom:

1. The atom cannot be found in a free state, but it combines with other atoms
2. Atoms of an element are similar, and differs from another element.

The chemical symbols of the important elements:

Element	Symbol	Element	Symbol	Element	Symbol
Hydrogen	${}_1\text{H}$	Neon	${}_{10}\text{Ne}$	Potassium	${}_{19}\text{K}$
Helium	${}_2\text{He}$	Sodium	${}_{11}\text{Na}$	Calcium	${}_{20}\text{Ca}$
Lithium	${}_3\text{Li}$	Magnesium	${}_{12}\text{Mg}$	Iron	Fe
Beryllium	${}_4\text{Be}$	Aluminum	${}_{13}\text{Al}$	Zinc	Zn
Boron	${}_5\text{B}$	Silicon	${}_{14}\text{Si}$	Copper	Cu
Carbon	${}_6\text{C}$	Phosphorus	${}_{15}\text{P}$	Gold	Au
Nitrogen	${}_7\text{N}$	Sulphur	${}_{16}\text{S}$	Silver	Ag
Oxygen	${}_8\text{O}$	Chlorine	${}_{17}\text{Cl}$	Iodine	I
Fluorine	${}_9\text{F}$	Argon	${}_{18}\text{Ar}$	Bromine	Br

Important Notes:

- In Chemical symbols the first letter always written in capital letters.
- Chemical symbols are taken from the Latin not the English name

Sodium	Natrium	Na
Potassium	Kalium	K
Copper	Cuprum	Cu

E . P . S

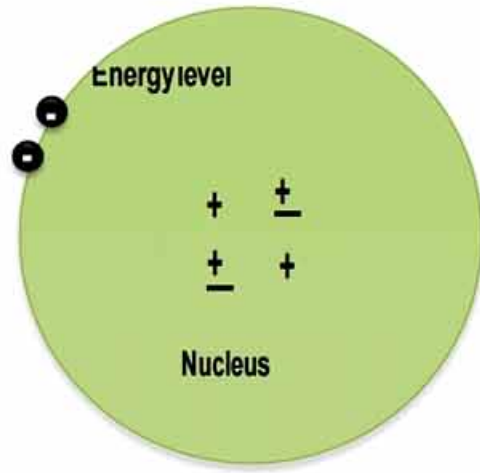
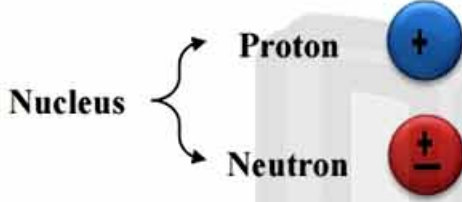
Mr. Haitham said

The structure of the atom:

It consists of:

- Nucleus
- Energy Levels

Energy Level → Electron

a) Nucleus:

- Exist in the center of the atom.
- The mass of the atom is concentrated in it (**Give Reason**)
Bec. It contains protons and neutrons
 - Protons:** positively charged particles. (+ve)
 - Neutrons:** electrically neutral particles (uncharged). (±ve)

b) Energy levels.

- **Energy level:** The paths of the electrons around the nucleus
- They are 7 energy levels (K-L-M-N-O-P-Q)
- They differ in size, energy and their capacity.

Electrons:

- Are very minute particles.
- Negatively charged particles. (-ve)
- Orbit the nucleus in energy levels
- Electrons orbit around the nucleus but do not fall in it. (**Give Reason**)
Bec. They orbit with high speed and escape.
- **The atom is electrically neutral (G.R)**
Bec. The number of electrons equals the number of protons

E . P . S

Mr. Haitham said

Comparing all the subatomic particles:

	Protons	Neutrons	Electrons
Position	In the nucleus	In the nucleus	Around the nucleus
Charge	Positive	Neutral	Negative
Mass	Greater than electron	Greater than electron	Extremely small [Can be neglected]

• The atom of each element is expressed by a chemical symbol:

- The mass number, written above the symbol from the left side.
- The atomic number, written below the symbol from the left side.

1. Atomic number:

- The number of protons in the nucleus.
- The number of electrons around the nucleus

2. Mass number:

- It is the sum of the numbers of protons & neutrons in the nucleus.

$$\text{Na Protons} = 11$$

$$\text{Na Electrons} = 11$$

$$\text{Na Neutrons} = 23 - 11 = 12$$

E . P . S

Mr. Haitham said

Science Activity

How to calculate the number of protons, electrons and neutrons:

Chlorine, $^{35}_{17}\text{Cl}$ Protons = 17
 Electrons = 17
 Neutrons = 18

Magnesium, $^{24}_{12}\text{Mg}$ Protons = -----
 Electrons = -----
 Neutrons = -----

Hydrogen, ^1_1H Protons = -----
 Electrons = -----
 Neutrons = -----

How to calculate the mass number and atomic number:

1. If the nucleus of Oxygen atom contains 8 protons and neutrons. Find the atomic number and the mass number of Oxygen

- The atomic number = no. of protons = -----
- The mass number = no. of protons + no. of neutrons =
 = ----- + ----- = -----

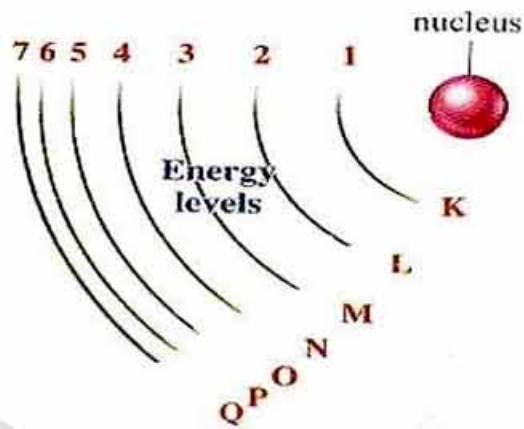
E . P . S

Mr. Haitham said

Energy levels:

The orbits of electrons around the nucleus

- The energy level differs in energy.
- Energy of electron = Energy of level
- The energy increase away of the nucleus
- They are 7 main energy levels

**The Rule:** $2n^2$ where, (n) is number of the energy level

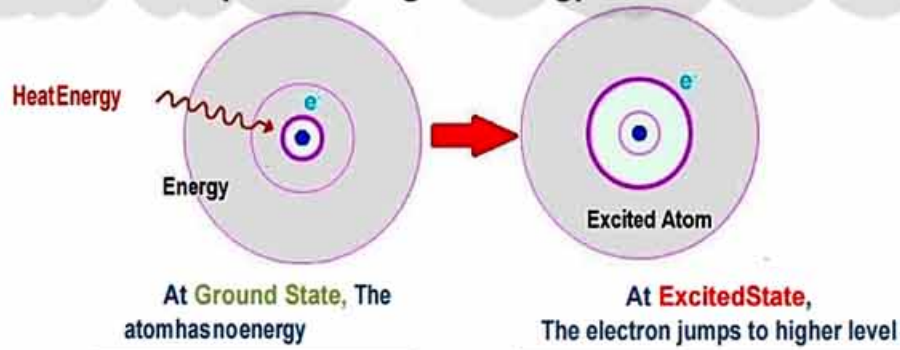
How to know the number of electrons that saturate the energy level:

This rule works only with the first four energy levels. (G.R)

- Because the atom will be unstable.
 1. In the first energy level (K) = $2(1)^2 = 2 \times 1 = 2$ electrons
 2. In the second energy level (L) = $2(2)^2 = 2 \times 4 = 8$ electrons
 3. In the third energy level (M) = $2(3)^2 = 2 \times 9 = 18$ electrons
 4. In the fourth energy level (N) = $2(4)^2 = 2 \times 16 = 32$ electrons

Important Note:

When an element heats up its atoms gains energy and become more excited



- **Excited atom:** The atom that gains a quantum of energy.
- **Quantum:** Amount of energy lost or gained by the electron

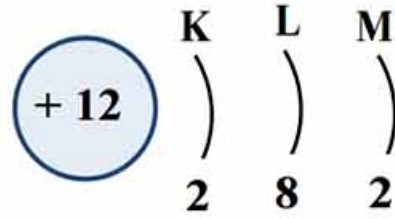
E . P . S

Mr. Haitham said

Science Activity

The electronic configuration

Magnesium, 12Mg



Why the energy level K filled before L?

- Bec. The K level has lower energy than L level

Complete the following like the previous example by the help of figures:

Oxygen, 8O



Chlorine, 17Cl



Neon, 10Ne

Sodium, 11Na

Calcium, 20Ca

E . P . S

Mr. Haitham said

The electronic configuration & chemical activity

The number of electrons in the outermost energy level determines the activity of the atom

1. If the number of electrons in the outermost energy level is less than 8 electrons, the atom becomes unstable (active), So they do chemical reaction.

Example of, active elements

Element	Symbol	Electronic configuration		
		K	L	M
Sodium	$_{11}\text{Na}$	2	8	1
Magnesium	$_{12}\text{Mg}$	2	8	2
Aluminum	$_{13}\text{AL}$	2	8	3

Element	Symbol	Electronic configuration		
		K	L	M
Phosphorus	$_{15}\text{P}$	2	8	5
Sulphur	$_{16}\text{S}$	2	8	6
Chlorine	$_{17}\text{Cl}$	2	8	7

2. If the number of electrons in the outermost energy level equals 8 electrons, the atom becomes (inactive), So they do not do chemical reaction.

Example of, inactive (noble) elements

Element	Symbol	Electronic configuration		
		K	L	M
Helium	$_{2}\text{He}$	2	-	-
Neon	$_{10}\text{Ne}$	2	8	-
Argon	$_{18}\text{Ar}$	2	8	8

E . P . S

Mr. Haitham said

Lesson Review

Q1: Complete the following:

1. Atom can't be found in a ----- state
2. Atoms of element are -----, while Atoms of compounds are -----
3. The atom contains of -----, ----- and -----
4. The mass of the atom concentrated in -----
5. The ----- are positively charged, while the ----- are negatively charged
6. The electrons revolve around the nucleus in paths called -----
7. Atomic number is the number of ----- in the nucleus or the number of ----- around the nucleus.
8. Mass number of the number of ----- and -----
9. The rule ----- tells the numbers of the electrons fill the energy level
10. The 2nd energy level satisfied by ----- electrons.
11. Excited atom is the atom that gains -----
12. The quantum is the amount of ----- lost or gained by an ----- when it transfer from an energy level to another.
13. If the number of electrons in the outermost energy level is equal to 8, the atom becomes -----
14. If the number of the electrons in the outermost energy level is less than 8 electrons, the atom becomes -----

E . P . S

Mr. Haitham said

Q2: Write the chemical symbol or the chemical Name:

Write the chemical symbol	Write the chemical Name
Sodium	Hg
Iron	Ag
Magnesium	He
Bromine	Cl
Nitrogen	Zn
Calcium	H
Iron	C
Oxygen	S
Potassium	Ar
Copper	Ne

Q3: Calculate the following:

- If the nucleus of Sodium atom contains 11 protons and neutrons, find the atomic number and the mass number of Sodium

.....

.....

.....

- If the nucleus of Calcium atom contains 20 protons and the mass number is 40, find the atomic number and the number of neutrons

.....

.....

.....

E . P . S

Mr. Haitham said

Q4: What is meant by?

1. The atomic number of Oxygen is 8

2. The mass number of Oxygen 16

Q5: Give reason for each of the following:

1. The mass of the atom is concentrated in the nucleus.

2. The atom is electrically neutral.

3. The nucleus is positively charged.

-----4. The rule $2n^2$ cannot be applied for the fifth energy level.-----

5. Some elements do chemical reaction.

6. Some elements are mono-atomic (never do chemical reaction).

E . P . S

Mr. Haitham said

Q6: Write the electronic Configuration for the following elements:

1. (7N)

2. (19K)

3. (17Cl)

4. (13Al)

5. (18Ar)

6. (3Li)

7. (6C)

E . P . S

Mr. Haitham said



تفوقك في أي عمل عليه العلامة دي

Unit Two

Heat Energy



m 40 | Page



هذا العمل حصري على موقع ذاكرولى التعليمي ويسمح بمشاركته فقط ولا يسمح بتداوله على أي مواقع أخرى
للمزيد من أعمالنا الحصرية، تفضل بزيارة موقعنا الإلكتروني من هنا <https://www.zakrooly.com>

E . P . S

Mr. Haitham said

Lesson one:

Energy Resources

Energy.

The ability to do work.

- The fuel inside the engine burns and give the energy to move the car.
- The food inside our cells and produce the energy needed to do activities.

The fuel in the car is similar to the food in the body. (Give Reason)

Because both burn and produce, energy needed for work.

Work:

The force acts on a body and moves it for a distance in a certain direction.

$$\text{Work (W)} = \text{Force (F)} \times \text{Displacement (D)}$$

(Joule) (Newton) (Meter)

Examples:

- A car moved for a distance 20 Meters pulling a piece of wood by a force of 75 Newton, Calculate the work done by this car.

$$\begin{aligned} - W &= F \times D \\ &= 75 \times 20 = 1500 \text{ Joule.} \end{aligned}$$

- A car moved for a distance 30 Meters pulling a piece of wood by a force of 20 Newton, Calculate the work done by this car.

$$\begin{aligned} - W &= \text{-----} \times \text{-----} \\ &= \text{-----} \times \text{-----} = \text{-----} \text{ Joule.} \end{aligned}$$

E . P . S

Mr. Haitham said

Forms of Energy:**1. Mechanical Energy:**

(P.E + K.E) the energy stored in stretched spring.

2. Electric Energy:

The energy produced from an electric generator.

3. Sound Energy:

The energy produced by music player.

4. Light Energy:

The energy produced by from the light bulb or the candle.

5. Chemical Energy:

The energy stored in the car battery or the food.

6. Heat Energy:

The energy produced from the heater or the stove.

7. Nuclear Energy:

The energy produced from the nucleus of the atom.

Resources of the Energy:**1. Permanent sources of energy (sun only)****2. Renewable sources of energy. (Wind, Waterfalls, Tide and ebb)****3. Non-renewable Sources of energy.**

- The fuel (oil, Coal, natural gas)
- The food (chemical reactions)
- Nuclear Reactions (The reactions in the nucleus of the atom)

E . P . S

Mr. Haitham said

- Some countries try to use the wind, energy to generate electricity (G.R)
Because they are cheap and clean

لا تنس الاشتراك في
قنوات ذاكرولي
على تطبيق التليجرام

تابع جديد ذاكرولي على
فيسبوك
تويتر
وانس اب
تليجرام

اكتب ذاكرولي في البحث وانضم لجروبات ذاكرولي
مع رياض الأطفال للصف الثالث الاعدادي

E . P . S

Mr. Haitham said

The Mechanical Energy:**Mechanical energy:**

It is the summation of potential and kinetic energy.

$$\bullet \text{ The work done} = \text{The Mechanical energy} \\ = \text{P.E} + \text{K.E}$$

- **Potential energy** (when you raise a ball from the ground)- **Kinetic energy** (when you leave the ball to fall down).**Potential Energy**

It is the stored energy in the object due its position.

The factors affecting the potential energy:

1. The weight of the object. (P.E directly proportional to w)
2. The height of the object. (P.E directly proportional to h)

$$\text{Potential Energy} = \text{Height (h)} \times \text{Weight (w).}$$

(P.E)

Joule

Meter

Newton

Kinetic Energy:

- It is the energy of the object due to its motion.

The factors affecting the kinetic energy:

1. The mass of the object. (K.E directly proportional to m)
2. The velocity of the object. (K.E directly proportional to V)

$$\text{Kinetic Energy (K.E)} = \frac{1}{2} \text{ Mass (m)} \times \text{Velocity}^2 (V^2)$$

Joule

Kg

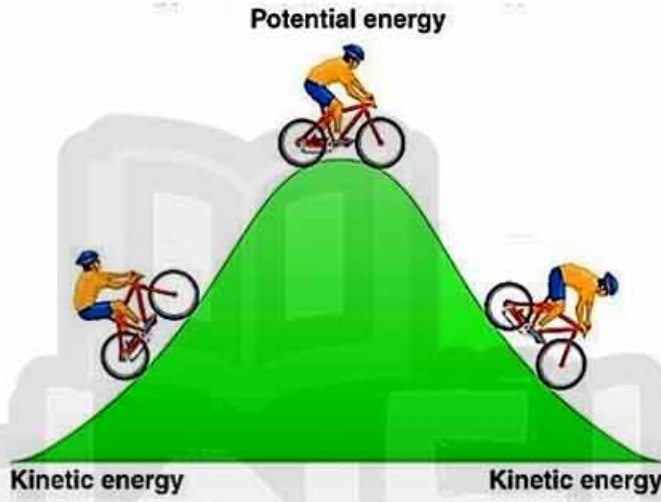
m/s

E . P . S

Mr. Haitham said

Important Note

- Each body has a constant value of mechanical energy
- Mechanical energy is directly to the potential and kinetic energy
- Potential energy is inversely proportional to the kinetic energy



- **At the highest point**, the object has only potential energy.
- **At the middle point**, the object has potential energy = kinetic energy
- **At the ground**, the object has only kinetic energy. [max. speed]

Give reason:

- An object moves horizontally has a constant potential energy.**
Because the height does not change
- The potential energy of an object increases when the height increases.**
Because the potential energy is directly proportional with the height
- The kinetic energy of an object increases when the velocity increases.**
Because the kinetic energy is directly proportional with the velocity

m 45|Page

E . P . S

Mr. Haitham said

Problem:

1. A stone has a mass of 0.4 K.g was thrown up and reached a height of 5 m, then its velocity was 4 m/sec. Calculate the following:

1. P.E

2. K.E

3. M.E (Work)

• Weight = $m \times 10 = 4 \text{ N}$

1. P.E = weight x height = $4 \times 5 = 20 \text{ joule}$

2. K.E = $1/2 \times \text{mass} \times \text{velocity}^2$ = $1/2 \times 0.4 \times 4^2 = 3.2 \text{ joule.}$

3. [M.E] W = P.E + K.E = $20 + 3.2 = 23.2 \text{ joule.}$

Practice:

2. A stone has a mass of 5 K.g was thrown up and reached a height of 6 m, then its velocity was 4 m/sec. Calculate the following:

1. P.E

2. K.E

3. M.E (Work)

.....

.....

.....

3. An iron cylinder was lift by a pulley to the maximum height. Calculate the following:

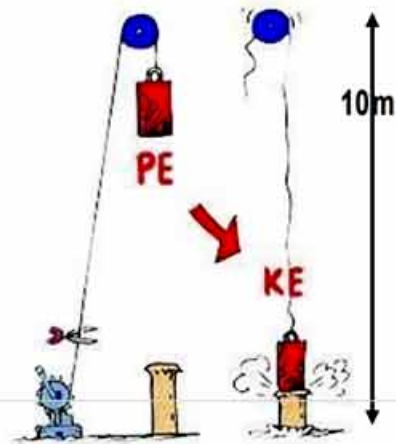
1. P.E when the object at the top

2. K.E when the object at the ground

.....

.....

.....



E . P . S

Mr. Haitham said

Lesson Review

Q1: Complete the following:

1. The ----- is the force acts on a body to move it for a distance
2. The measuring unit if Work is known as -----
3. The renewable resources of energy such as ----- while the non-renewable resources of energy such as -----
4. The factors affecting on the Work done to an object are ----- and -----
5. The factors that affecting the potential energy are ----- and -----
6. The potential energy is the energy ----- in an object at rest.
7. The factors affecting the kinetic energy are ----- and -----
8. The work-done for moving object equals -----
9. The potential energy is ----- Proportional to height of the object from the surface of the earth.
10. A kind of energy produced form the atomic reactions in the nucleus is known as -----
11. Each body has a constant value of ----- energy.
12. The kinetic energy is ----- Proportional to the velocity of the object.
13. The mechanical energy is the sum of ----- and -----
The energy stored in the food molecules is ----- energy
14. The energy used by plants in photosynthesis process ----- energy

E . P . S

Mr. Haitham said

Q2: Give Reason for each of the following:

1. The food in the body is similar to the fuel in the car.

.....

.....

2. The renewable resources of energy are more common in use.

.....

.....

3. The potential energy of an object moves horizontally does not change.

.....

.....

4. The potential energy of an object increases when the height increases.

.....

.....

5. The kinetic energy of an object increases when the velocity increases.

.....

.....

Q3: what happens for each of the following?

1. An object moves horizontally (regarding the P.E)

.....

.....

2. An object moves with increasing speed (regarding the K.E)

.....

.....

Q4: Match.

-----	Potential Energy	1. $\frac{1}{2} mv^2$
-----	Kinetic Energy	2. $F \times d$
-----	Mechanical energy	3. $m \times g \times h$
-----	Work	4. P.E + K.E

E . P . S

Mr. Haitham said



E . P . S

Mr. Haitham said

Q5: Problems

1. Find the potential energy if the mass body (20 kg), height (10m) and gravity (10 m/sec²)

.....

2. Find the kinetic energy if the mass of the body is (5 kg), height (5m) and gravity (10 m/sec²)

.....

3. Find the mechanical energy if potential energy (20 Joule) and kinetic energy (30 Joule)?

.....

4. An iron cylinder with a weight of 60 N, was lift up ward, then find

a) At the top

1. P.E

2. K.E

3. M.E

b) At the middle

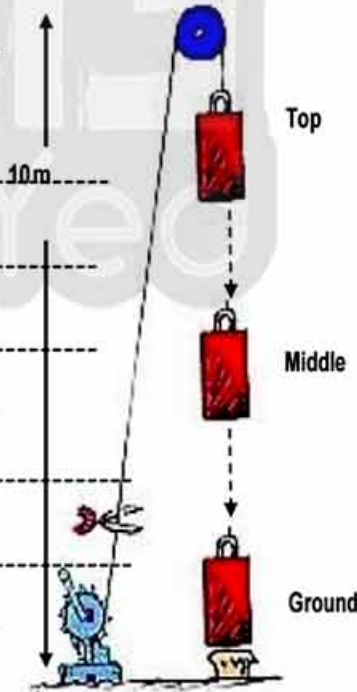
1. P.E

2. K.E

c) At the ground

1. P.E

2. K.E



E . P . S

Mr. Haitham said



E . P . S

Mr. Haitham said

Lesson Two

Energy Transformation

- The energy changes from one type to another, without losing any of its value.

Science Activity

Observation:

- What happens when you flick the pendulum?



Put ✓ in front of the correct one

	A	B
The potential energy reaches maximum at		
The kinetic energy reaches maximum at		
Do you think it is ✓ or X		
The 2 balls raise up to the same height		
The mechanical energy of the 2 balls are the same		

A

B

Conclusion:

- The P.E and K.E changes but the mechanical energy is the same

The conservation law of Mechanical Energy:

- The sum of potential and kinetic energy of an object is the same.

E . P . S

Mr. Haitham said

Science Activity

Observation:

- What happens when you turn on the following devices?

Put ✓ in front of the correct one

	Heat	Light	Sound
The electric Lamp converts electric energy to			
The electric Heater converts electric energy to			
The electric speaker converts electric energy to			

Conclusion:

- The same kind of energy changes into different types of energy
- Energy never created nor destroyed

The conservation law of Energy:

- Energy neither created nor destroyed, but it converted from one type to another.

E . P . S

Mr. Haitham said

Examples of Energy Transformation

The process	Energy used	Energy produced
On winding a spring toy	Kinetic	Potential
On leaving the spring free	Potential	Kinetic
Rubbing your hands	Kinetic	Heat
Hammering an iron piece	Kinetic	Heat & Sound
Metallic bell (school bell)	Kinetic	Sound
Electric heater, fire.	Electric	Heat
Electric fan	Electric	Kinetic
Electric lamp or bulb	Electric	Light
Battery (dry cells)	Chemical	Electric
Torch	Chemical	Electric → light
Running	Chemical	Heat → kinetic
Photosynthesis	Light	Chemical

Energy Transformation inside the car:

Car Engine	Chemical	→	Thermal	→	Mechanical
Car Dynamo	Kinetic	→	Electric		
Car lamps	Electric	→	Light		
Car air conditioner	Electric	→	Heat		
Car Radio	Electric	→	Sound		

E . P . S

Mr. Haitham said

Technological Applications of Energy Transformation:

Application	Energy changes
Sewing Machine	Electric energy into mechanical energy.
Solar Cells	Solar energy into electric energy.
A cellular Phone	Electromagnetic energy waves into sound energy.
Alarm Clock	Chemical energy into kinetic and sound energy.
Television	Electric energy into light and sound energy.

The negative effects of technology:

1. Environmental Pollution.
2. Harming human's life.
3. Bad use of Human in Wars and destruction.

Examples of the negative effect of the technological applications:

Application	Negative Effect	Disease
Car Exhaust	Air pollution	Chest and eye diseases.
Military Explosions	Huge destruction	Diseases leads to death.
Chemical Pesticides	Water, air, and soil pollution	Cancer.
Nuclear Weapons	Huge destruction.	Diseases leads to death.
Mobile Webs	Electromagnetic pollution	Heart diseases.

E . P . S

Mr. Haitham said

Lesson Review

Q1: Complete the following:

1. The energy never ----- nor ----- but, it is only converted from one type to another.
2. The car engine converts the energy from ----- to -----
3. The cell phone converts the energy from ----- to -----
4. The energy is converted from ----- to ----- In the sewing machine.
5. The energy is converted from ----- to ----- During running
6. In the photosynthesis process the energy converted from ----- to -----
7. The chemical pesticides cause ----- disease.
8. car exhausts and air pollution cause ----- disease
9. the electromagnetic pollution cause ----- disease
10. the chemical pesticides cause ----- disease

Q2: Give reason for each of the following:

1. The energy never lost nor gained.

2. Cars have negative effect on the environment and the man.

3. The chemical pesticides have negative effect on man health.


E . P . S

Mr. Haitham said

Q3: Complete the following:

The process	Energy used	Energy produced
On winding a spring toy		
On leaving the spring free		
Rubbing your hands		
Hammering an iron piece		
Metallic bell (school bell)		
Electric heater, fire.		
Electric fan		
Electric lamp or bulb		
Battery (dry cells)		
Torch		
Running		
Photosynthesis		

Car Engine
 Car Dynamo
 Car lamps
 Car air conditioner
 Car Radio



E . P . S

Mr. Haitham said



E . P . S

Mr. Haitham said

Lesson Three:

Heat Energy

Heat Energy:

Form of energy, which transfers from higher temperature to lower one

- Heat transfer stops when the temperature of them are equal.

We get the heat through many ways

1. Sun.
2. Fire.
3. Friction.



- The friction is a method to generate heat
- Friction converts **mechanical energy** into **heat energy**.

Science Activity

Observation:

- What happens when you peddle your bicycle very fast and then try to touch the tires?



Put \checkmark in front of the correct one

Your hands feel the tires	Hot	Cold	Nothing
	Potential	Kinetic	Heat
You started with			
You ended with			

Conclusion:

- The friction changes the kinetic energy into heat energy

E . P . S

Mr. Haitham said

The temperature:

The condition that states the direction of heat energy transfer

- The energy transfer happens when the object touches another body.
- The temperature is directly proportional to the particles' kinetic energy.

Science Activity

Observation:

- What happens when you mix hot water to cold water?
 - Use a thermometer to measure the temperature

Put \checkmark in front of the correct one

	High temperature	Low temperature
The hot water has		
The cold water has		
	More than 70 °C	Less than 30 °C
The final temperature		Around 50 °C

Conclusion:

- The friction changes the kinetic energy into heat energy

Facts:

- Heat transfers from an object of higher temperature to another of lower temperature.
- Heat transfer stops when the temperature of the two media becomes equal.
- The temperature is measured by **thermometer**.



E . P . S

Mr. Haitham said

Ways of Heat Energy Transfer



1. Heat Transfer by Conduction:

- It is the transfer of heat energy through solid particles
- Ex: Transfer of heat through solids.

Application.

- Making cooking pans of copper or aluminum. (Give Reason)
Because they are good conductors of heat.

Science Activity

Observation:

- What happens when you stir a hot tea with a metal spoon?

Put ✓ in front of the correct one

	Hotter	Colder
The spoon become	<input type="checkbox"/>	<input type="checkbox"/>
The molecules of the spoon	<input type="checkbox"/> move	<input type="checkbox"/> Stay still

Conclusion:

- The heat transfer from a molecule to another but molecules do not move
- The heat transfer through solid molecules by conduction

2.

m 61 | Page

E . P . S

Mr. Haitham said

3. Heat transfer by Convection:

- It is the transfer of heat in gas and liquid molecules
- **How it happens?**
Hot molecules have less density so they rise upwards, while colder molecules have more density so they fall down.
- Heat transfer by convection need material medium to transfer.

Applications.**1. The air condition always are at the upper part of the room.**

(Give Reason) Because they release cold air with high density so it falls down, while the hot air with less density rises up to cool again

2. The electric heater always are at the lower part of the room.

(Give Reason) Because they release hot air with low density so it rises up, while the cold air with less density falls down to cool again

Science Activity**Observation:**

- How the vapor moves?



Put ✓ in front of the correct one

	Down ward	Up ward
The cold vapor moves	<input type="checkbox"/>	<input type="checkbox"/>
The hot vapor moves	<input type="checkbox"/>	<input type="checkbox"/>

Conclusion:

- Cold air is heavy and fall down, while hot air is light and rise up
- Ups and downs of air known as **convection current**

E . P . S

Mr. Haitham said

3. Heat transfer by radiation:

- It is the transfer of heat through gas molecules and empty space (vacuum)
- Heat transfer by radiation does not need medium molecules.

Application.**1. Heat transfer from fire to man's hands by radiation not convection. (G.R)**

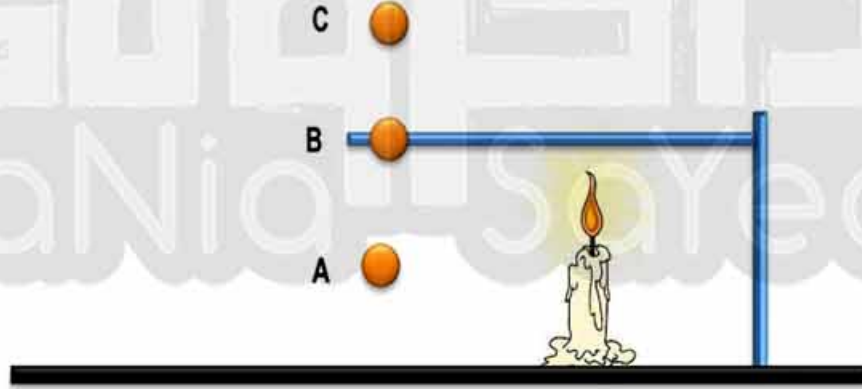
Because the air is bad conductor of heat, so it carried by radiation not by convection.

2. Heat of the sun does not reach the earth by radiation not convection. (G.R)

Because of the space between the earth and the sun.

Science Activity**Observation:**

- What is the most accepted way to transfer the heat to different points?

Put \checkmark in front of the correct one

	Conduction	Convection	Radiation
The heat transfers to A by			
The heat transfers to B by			
The heat transfers to C by			

E . P . S

Mr. Haitham said

Solar Energy

- The energy comes from the sun.
- The origin of most energy resources on the earth and its forms.
- The cleanest source of energy, as it does not pollute the environment.

The solar energy is essential for other forms of energy. (Give Reason)

1. Solar energy generates the wind movement
2. Producing electricity by using solar cells
3. Solar energy is stored in plants as chemical energy by photosynthesis
4. Solar energy is stored in petroleum (fuel) as chemical energy

Application of solar energy

- | | |
|-----------------|---|
| 1. Solar Cells | Converts Solar energy changes into electric energy. |
| 2. Solar heater | Converts Solar energy changes into heat energy. |
| 3. Fresh Water | desalination seawater (to get fresh water) |
| 4. Space | Operating Satellites and space ships |

Technological Applications depending on heat energy:

	Energy in	The Resource	The effect
Electric heater	Electricity	Renewable	Non-polluted
Solar heater	The sun	Permanent	Non-polluted
Electric stove	Electricity	Renewable	Non-polluted
Gas oven	Natural gas	Non-renewable	Polluted

E . P . S

Mr. Haitham said

Lesson Review

Q1: Choose the correct answer:

- The energy transfer from sun to earth by -----
 - Convection
 - Convection and radiation
 - Conduction
 - Radiation
- The energy transfer from fire to man's hand by -----
 - Convection
 - Convection and radiation
 - Conduction
 - Radiation
- The energy transfer from electric heater to us by -----
 - Convection
 - Convection and radiation
 - Conduction
 - Radiation
- The energy transfer from hot tea to the cup holding it by -----
 - Convection
 - Convection and radiation
 - Conduction
 - Radiation
- The energy transfer from through boiling water by -----
 - Convection
 - radiation and conduction
 - Conduction
 - Radiation
- The energy transfer from stove to the metal pot by -----
 - Convection
 - Convection and radiation
 - Conduction
 - Radiation
- When air heats up its density -----
 - decrease
 - stay still
 - increase
 - decrease then increase
- When air cools down its density -----
 - decrease
 - stay still
 - increase
 - decrease then increase

E . P . S

Mr. Haitham said

Q2: Complete the following:

1. The heat energy is a form of energy which is transferred from object ----- temperature to object with ----- temperature
2. The heat energy transfer stops when the temperature of the 2 objects become -----
3. The ----- is the way in which the heat energy does not need any medium to transfer
4. The ----- is a way in which the heat energy needs any medium to transfer
5. The heat transfers by ----- Through liquids and gases.
6. The condition which state the direction of the heat energy from or to the object when it is connected to another object is known as -----
7. The temperature is direct proportional to -----
8. Gases controls the heat transfer by two ways they are ----- and -----
9. The solar energy is stored in the plants in the form of ----- by the photosynthesis process.
10. The solar energy is the reason for ----- movement.
11. In the fuel, the ----- energy is stored as a chemical energy.
12. We can use -----energy t desalinate the sea water
13. The solar cell converts ----- energy to -----energy
14. The solar stove converts ----- energy to -----energy

E . P . S

Mr. Haitham said

Q3: Give reason for each of the following:

1. The air conditioner is always at the upper part of the room.

2. Making cooking pans of copper or aluminum.

3. The electric heater is always at the bottom of the room.

4. The heat transfers to the outer space by radiation not by convection.

5. Heat energy produced from the solar energy is preferable to the heat produced from burning fuel.

6. Sun is the cleanest source of energy.

Q4: what happens if?

1. The air conditioner is at the lower part of the room.

2. The air heats up.

E . P . S

Mr. Haitham said

Unit Three

Adaptation and Diversity



m 68 | Page

E . P . S

Mr. Haitham said

Lesson one:

Living Organisms Diversity and Principles Of Their Classification

Diversity in living Organisms:

1. Diversity of animals

The way of feeding.	Herbivorous, plant eater	Horse
	Carnivorous, meat eater	Tiger
The Size	Big animals	Elephant
	Small animals	Rat
The environment	Water	Shark and corcodile
	Land	Horse

2. Diversity in plants

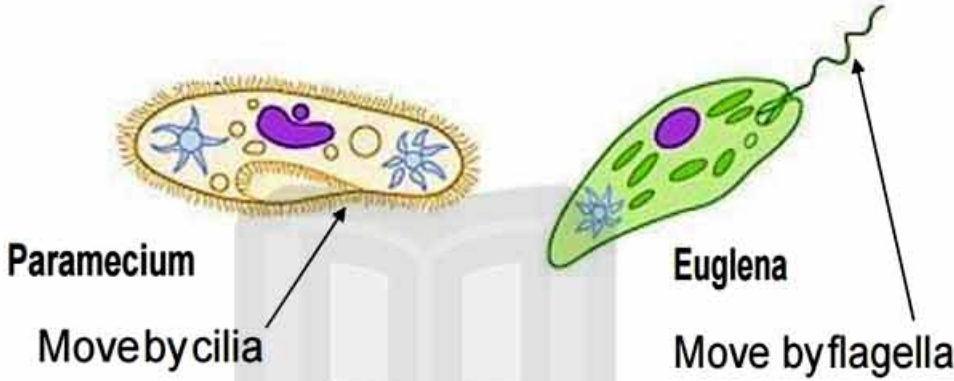
Size of tree	Huge trees	Palm, camphor
	Short weeds	Clovers and gargeer
The Size of leaves	Small sized leaves	Molukhiyah and Strawberry
	Large sized leaves	Banana

E . P . S

Mr. Haitham said

3. Diversity in Microorganisms

- Organisms cannot be seen by naked eye, **and** unicellular organisms (one cell)
- They live in (air - water - soil) **and** differ in shape and their way of movement



تابع جديد زاكروولي على موقعنا

<https://www.zakrooly.com>

E . P . S

Mr. Haitham said

Classification of the living organisms.

Taxonomy

A science that searches similarities and differences among living organisms.

✘ It places the similar ones in the same group and call it **Species**. (Give reason) to make them easy for studying

1. Classification of plants.

Plants are classified according to (*External shape - Way of reproduction*).

Classification according to External Shape.

a) Some plants not have roots, stems and leaves	Brown Algae, Red Algae and Green Algae.
b) Some plants have roots, stems and leaves	Wheat , palms and camphor plants

a) Plants reproduce by spores	Ferns, small terrestrial plants. - Adiantum and vougeir.
-------------------------------	---

Gymnosperm (cone)	Pine cycas
-----------------------	---------------

b) Plants reproduce by seeds.	
-------------------------------	--

Angiosperm	Mono-cotyledon Wheat Di-cotyledon Bean
------------	---

E . P . S

Mr. Haitham said



Bean



Adiantum



Pine



B



Wheat



E . P . S

Mr. Haitham said

2. Classification of animals.

Classification of animals according to the nature of body support

a) Soft body

- Jelly fish
- Earth worm
- octopus

b) Supported body

External Support

- Snails
- Roach

Internal Support

All vertebrates

- Mammals: Dog
- Birds: Hawk
- Reptiles: lizard



Jelly fish



Earth worm



Snail



Dog



Hawk



Lizard

E . P . S

Mr. Haitham said

Classification of arthropods according to the number of legs.**- Arthropods**

They are invertebrate characterized by jointed legs.

They are classified into

a) Insects	- 3 pairs of jointed legs	<ul style="list-style-type: none"> - Ant - Fly - Bee - Roach - cockroach
b) Arachnids	- 4 pairs of jointed legs	<ul style="list-style-type: none"> - Spider - Scorpion
c) Myriapods	- Many pairs of jointed legs	<ul style="list-style-type: none"> - Scolopendra - Julius



Roach



Bee



Spider



Scolopendra



Fly



Ant



Scorpion



Julius

E . P . S

Mr. Haitham said

Classification of mammals according to the number and the kind of teeth.

They are classified into

a) Edentates. - Toothless -	- sloth
	- Armadillo
Front outward teeth	- Hedgehog
Sharp Canines	- Tiger
b) Having teeth.	Rodents
	1 pair in upper jaw - Squirrel
Sharp incisors	Lagomorphs
	2 pairs in upper jaw - Rabbit



Sloth



Armadillo



Hedgehog



Tiger



Squirrel



Rabbit

E . P . S

Mr. Haitham said

Species

A group of living organism similar in **shape** and **way of feeding** and can **reproduce**.

- ❖ The individuals of the same species can give birth of new fertile individuals to reproduce and keeping the existence of species.

**Example: Cat species**

- A group of different **cats** but similar in shape, way of feeding and can reproduce among each other
- Mating (marriage) can occur between the different groups of the same species but they produce a sterile female (cannot reproduce)
 - The donkey and zebra produces a sterile female called "**Zonkey**"
 - The donkey and horse produce a sterile female called "**mule**"

E . P . S

Mr. Haitham said

Lesson Review

Q1: Complete the following:

- The basic unit of classification of the living organisms is the -----
- The science that classify the organisms into similar groups is -----
- Plants may carry large-sized leaves such as -----
and some has small sized leaves such as -----
- When you examine a pond water drop by a microscope some micro-organisms can be seen such as -----, -----

- Plants may reproduce by spores such as -----
and other plants reproduce by seeds such as -----
Arthropods are classified according to the number of legs into -----
-----, -----, -----
- The cockroach belongs to the ----- whereas
the scorpion belongs to -----
- Toothless mammals such as ----- and -----
- Armadillo is one of the ----- mammals and
hedgehog belongs to ----- mammals
- The number of the jerboa's upper jaw incisors is -----
----- and their number in the rabbit's upper jaw is -----

E . P . S

Mr. Haitham said

Q2: Cross out the odd word in each of the groups below:

1. Locust - Mosquito - Spider - Cockroach - Flies
2. Lion - Tiger - Dog - Wolf - Armadillo
3. Beans - Pea - Corn - Pine - Wheat
4. Octopus - Desert snail - Frog - Fresh water mussels - Tilapia



E . P . S

Mr. Haitham said

Q3: Choose the correct answer:

- The scorpion belongs to-----
 - Arachnids
 - Edentates
 - Myriapods
 - Insects
- Plants that reproduce by spores such as -----
 - Pine
 - Adiantum
 - Beans
 - Wheat
- The animals which don't have a body support such as -----
 - Earth worm
 - Shark
 - Jelly fish
 - a and c
- The number of pairs in scorpion legs is -----
 - 2
 - 10
 - 3
 - 4
- The fly is a/an -----
 - Bird
 - Animal
 - Insect
 - Arachnid
- Some plants have no roots, stem as -----
 - Algae
 - Rice
 - Flowers
 - Bean
- The plants reproduce by seeds called -----
 - Flowering plants
 - Rose
 - Ferns
 - Algae
- Some living organisms are microscopic as -----
 - Dust
 - Grass
 - Ant
 - Paramecium

E . P . S

Mr. Haitham said

Lesson Two:

Adaptation and Diversity

The change and diversity in the environments where the living organisms live was the reason leads to the diversity in the living organisms to cope with the environmental changes such as

1. Climate
2. Food
3. Availability of the water

Adaptation

A change in behavior, body structure or function to fit the environmental changes.

Science Activity

Observe and answer the questions?



	Camel	Hawk	Whale	Bat	Heron
Which one can walk on sand					
Which one can hunt preys					
Which one can swim and dive					
Which one can fly in dark					
Which one can pick up worms					

Reasons for Adaptation:

- 1) To get food
- 2) To escape from enemies.
- 3) Way of motion

E . P . S

Mr. Haitham said

Types of Adaptation

Structural Adaptation

Functional Adaptation

Behavioral Adaptation

1) Structural Adaptation. (Anatomical)

- It is an adaptation in the structure of a body organ.

Camel's Pads

- A thick flat . (Give Reason)
- Enable camels to move on hot sand.



Horse's Hooves

- Strong solid. (Give Reason)
- Enable horses to move solid rocky soil.



2) Functional Adaptation.

- It is an adaptation of some organs and tissues to do a specific function.
- Example,
 - a) Secreting poison in snakes.
 - b) Secreting sweat in humans on hot days.





3) Behavioral Adaptation.

- It is an adaptation in the life activity of some animals.
- Example,
 - a) Activity of birds during daytime.
 - b) Activity of bats at night.
 - c) Migration of some birds a certain of the year.


E . P . S

Mr. Haitham said

Adaptation and Motion Diversity in Mammals:

Animal	Modification	Reason
Whale 	- The fore limbs are paddles.	- Swimming
Bat 	- The fore limbs are wings.	- Flying.
Horses 	- The 4 limbs with hooves.	- Run on rocks.
Monkeys 	- The fore limbs are long.	- Climb trees.

Adaptation and Nature of Food:

Birds	Modification in beaks and legs.
Vultures 	Beaks: Sharp strong crooked to tear preys. Leg: Sharp claws front and back catch preys
Hoopoe 	Beaks : long and thin to pick worms Legs: long, thin and e to walk in water.
3. Water animals Duck 	Beaks: wide and hollow to filter food. Legs: palm legs to swim.

E . P . S

Mr. Haitham said

Adaptation in Insect Eating Plants (Insectivorous):

- These plants get carbohydrates from photosynthesis.
- They get proteins by catching insects and digesting them.

- Modification.

Leaves of plants can capture and digest insects then absorb the nitrogen.

- Examples.

Drosera

sticks and rolls the insect then digests it.



Dionea

sticks and catches the insect then digests it.



E . P . S

Mr. Haitham said

Adaptation and environment

Examples of Adaptation in Living Organisms.

1. Hibernation

In winter, some animals stop their feeding and bury themselves in mud to overcome the cold.



Frog



Lizard

2. Aestivation

In summer, some animals avoid shortage of water by hiding away from the sun in tunnels.



Jerboa



Desert Snail

3. Birds Migration

In winter, some birds leave cold places to warm places where they could reproduce. They return to their normal life in the spring.



E . P . S

Mr. Haitham said

4.Hiding**Camouflage:** the ability of some animals to hide from their enemies.Stick Insect

Looks like the plant branches.

Leaf Insect

Looks like the plant leaves.

Chameleon

Take the color of the place to escape from enemy.

The Camel

- The camel called The Desert Ship. (Give Reason)

Bec. It can survive for many days without water and food

E . P . S

Mr. Haitham said

Lesson Review

Q1: Complete the following:

- Camel's pad is a kind of ----- adaptation
 - Functional
 - No
 - Behavioral
 - Structural
- Hunting at night of a bat is a kind of ----- adaptation
 - Functional
 - No
 - Behavioral
 - Structural
- Poison of a snake is a kind of ----- adaptation
 - Functional
 - No
 - Behavioral
 - Structural
- The birds that have crooked beaks are -----
 - Predator birds
 - Domestic birds
 - Water birds
 - Insectivores birds
- Dicounea is a kind of -----
 - Predator birds
 - Domestic plant
 - Water plants
 - Insectivores plants
- The duck has -----
 - Palm leg
 - Small leg with claws
 - Thin leg
 - Long leg
- The ----- has long arms to climb the tree
 - Monkey
 - Dolphin
 - Octopus
 - Tiger
- Hoopoe is a kind of -----
 - Predator birds
 - Domestic birds
 - Water birds
 - Insectivores birds

E . P . S

Mr. Haitham said

Q1: Complete the following:

1. Insectivorous plants such as -----, -----.
2. Hawks have ----- beaks to tear the prey, whereas ducks have ----- beaks to filter food from water.
3. Horse's limbs end in ----- to run over rocky soil whereas camel's limbs end in ----- to walk on hot sand.
4. The poisons gland in the snake is a kind of ----- adaptation
5. The duck and goose have ----- and ----- beak to filter the food from the water
6. The whale front limbs are modified into ----- to swim, whereas they modified in the bat into ----- to fly
7. The hereon and hoopoe have ----- beaks to pick the worms
8. Insectivores plants get their protein from -----

E . P . S

Mr. Haitham said

Q2: Give the reason:

1. Hereon and hoopoe have long thin beaks and long legs.

.....

.....

2. Some plants hunt insects.

.....

.....

3. Hawks have sharp claws and strong claws.

.....

.....

4. Camel has a flat thick pad.

.....

.....

5. Some animals undergo hibernation

.....

.....

6. Some species of birds migrate from their original habitats in Winter

.....

.....

Q3: Give an example showing each of the following:

1. Camouflage in insects

.....

2. Hibernation in amphibians

.....

3. Aestivation in rodents

.....

Best wishes



E . P . S

Mr. Haitham said

REVISION PRACTICAL EXAM FIRST TERM (PREP 1)

Activity no 1

To prove that molecules of matter are in a state of a continuous motion:

Steps:

- 1- Put a small amount of potassium permanganate in the glass cylinder contain water.
- 2- Leave the cylinder and observe what happen after a period of time

Observation :

The color of violet spreads in a water .

Conclusion :

Molecules are in a continuous motion.



E . P . S

Mr. Haitham said

Activity no 2

To prove the presence of inter molecular spaces among molecules :

Steps:

- 1-Bring the graduated cylinder and put 300 cm³ of water.
- 2- Add 200 cm³ of ethyl alcohol .
- 3- Measure the volume of mixture .

Observation :

The volume of mixture = 488 cm³ less than 500.

Conclusion :

There are inter molecular spaces among the molecules of matter .



E . P . S

Mr. Haitham said

Activity no 3

To identify the transformation of energy in the electric lamp .

Steps:

- 1-Make the electric circuit
- 2- close the circuit as shown in the figure .
- 3-touch the glass of the lamp.

Observation :

The electric lamp lights and become hot .

Conclusion :

In the electric lamp the electric energy convert into light energy and heat energy .



E . P . S

Mr. Haitham said

Activity no4

To design a model of the simple electric cell

STEPS

- 1-Try to soften the lemon by pressed on it
- 2 - Dip the zinc rod and copper wire into lemon .
- 3- Form an electric circuit near a compass

Observation :

The needle of compass deflects

Conclusion :

The chemical energy stored in the lemon convert into electric energy



تفوقه في أي عمل عليه العلامة دي

E . P . S

Mr. Haitham said

Classify these animals:

Spider - arachnids

Scolopendra - myriapods

Locust - insects

Rodents - squirrel

